



JINDAL ADARSH GRAMYA BHARTI

HR. SEC. SCHOOL, KIRODIMAL

NAGAR

SUMMER VACATION HOMEWORK -

2026

CLASS - IV

CBSE



Instructions:

Write neatly and clearly. Mention your Name and Class. Use proper headings and keep your work clean and well-arranged. Make a creative cover page using colors and drawings. Do all work yourself. Follow all subject instructions. Submit your work in a file or booklet using a paper folder.

 **Worksheet:**

Solve the worksheet neatly. You may either copy it or take a printout.

DAY WISE HOMEWORK

S.N	Date & Day	Subject	Work
1	04-05-2026 (Monday)	English Refer to EW1 Hindi अनुच्छेद लिखिए- गर्मी के मौसम में खाए जाने वाले फलों में से किसी एक पसंदीदा फल के बारे में लिखिए। गर्मी के मौसम में खाए जाने वाले फल से जो बीज निकलती है, उन बीजों का उपयोग आप किस तरह से करेंगे? क्या यह बीज हमारे लिए सहायक होंगे (अपने विचार लिखकर चित्र द्वारा समझाइए)।	
2	05-05-2026 (Tuesday)	EVs Refer to EVW1 Arts Draw a vase and colour it.	
3	06-05-2026 (Wednesday)	Hindi Refer to HW1 EVs Plant care activity (Plant a seed water it daily. Draw different stages of germination you have observed in 10 days)	
4	07-05-2026 (Thursday)	Maths Write names of months and days GK Write 10 lines about "Our Country"	
5	08-05-2026 (Friday)	English Interaction class (By Mrs. Malti singh)	

S.N	Date & Day	Subject	Work
1	11-05-2026 (Monday)	Art	Draw a landscape scene.(Mountains , river ,birds etc.)
		Hindi	सप्ताह के सात दिनों के नाम लिखें व याद करें।
2	12-05-2026 (Tuesday)	Maths	Refer MW1
		GK	Draw 5 different National symbol and write about two lines of each .
3	13-05-2026 (Wednesday)	EVS	Refer EVW2
			Speaking activity
		English	Draw "My Dream House" and explain it and make a video
			आ से अ: तक की मात्राओ से (5 - 5) शब्द लिखिए।
4	14-05-2026 (Thursday)	Hindi	बारहखड़ी लिखिए क, ख, ग, घ, च, छ, ज, झ, ट, ठ, ड
		English	Solve the crossword puzzle (Refer EW2)
5	15-05-2026 (Friday)	Maths	Interaction class (Online class will be taken by Mrs. Deoyani Chandra)

S.N	Date & Day	Subject	Work
1	18-05-2026 (Monday)	Hindi	Refer HW2
		Art	Glass bottle painting (Paint simple floral or pattern design on a waste glass bottle)
2	19-05-2026 (Tuesday)	EVS	Make a model of skeleton using earbuds.
		Maths	MW2
3	20-05-2026 (Wednesday)	English	Explain a simple recipe (Any one) (Bhelpuri, Sandwiches, Lemonade and Sprouts Salad)
		Hindi	* नीचे दिए गए निर्देशों का पालन करते हुए एक चित्र बनाइए। 1 - चित्र में सबसे नीचे एक तालाब है। 2 - तालाब में एक कमल का फूल है। 3 - तालाब में बतखें तैर रहे हैं। 4 - तालाब के किनारे एक आम का पेड़ है। 5 - पेड़ पर एक चिड़िया बैठी है।
4	21-05-2026 (Thursday)	EVS	EVW3
		Art	Clay plate decoration (Decorate a plate with colours and traditional patterns neatly)
5	22-05-2026 (Friday)	Hindi	Interaction class (By Mrs. Lata Dewangan)

S.N	Date & Day	Subject	Work
1	25-05-2026 (Monday)	EVS	Nature explorer Collect five different leaves, paste them in notebook and write their names and colours.
		GK	Draw the Map of C.G. Mark the district.
2	26-05-2026 (Tuesday)	Hindi	वाक्य बनाइए विद्यालय ,पानी ,पेड़ ,रिमझिम, किताब ,रामायण ,वीणा ,नगर कमल ,बस
		English	Summer word scramble (Spellbee) Refer(EW3)
3	27-05-2026 (Wednesday)	Maths	Draw the angles or make the angles using straw or match stick
		Art	Recycle with fun (Create a decorative item using waste materials from home)
4	28-05-2026 (Thursday)	GK	Draw any four National symbol of our country and write two lines about it.
		Maths	Fraction firki, (Make a fraction firkin divide into 2,3,4,6,or 8 parts. Colour each part differently.
5	29-05-2026 (Friday)	EVS	Interaction class (By Mrs.Pooja Gupta) (Fireless cooking)

EW 2 - 11-05-2026

S.N	Date & Day	Subject	Work
1	01-06-2026 (Monday)	GK Moral Values	Write the names of rivers that flows in our CG and also mention the district. Story telling (Shravan's Kumar story)
2	02-06-2026 (Tuesday)	Maths	Write Roman numerals from 1 to 30.
3	03-06-2026 (Wednesday)	EVS GK	Refer to EVW4 Question related to science and nature. 1)Name the primary colors 2)When is Earth day celebrated? 3)Name any Five music instruments. 4)Name the sessions. 5)Name any four medicinal plants
4	04-06-2026 (Thursday)	English Maths	Write about what you did on summer holidays - My Family numbers (Clues are as follows. 1) House Number -- 2) Mobile Number only first four digits -- 3) Vehicle Number--) Arrange all the numbers in place value chart
5	05-06-2026 (Friday)	GK	Interaction class (Online classes will be By Mrs. Deoyani Chandra)

S.N	Date & Day	Subject	Work
1	08-06-2026 (Monday)	Maths	Create a colourful pattern using different shapes
		EVS	Draw any two helpers and right two lines about it.
2	09-06-2026 (Tuesday)	English	Creative writers (My mini story book or My travel dairy)
		Hindi	दो दिनों की अवकाश हेतु आवेदन पत्र लिखिए ।
3	10-06-2026 (Wednesday)	Art	Craft with ice cream stick make a wall hanging are desk organiser
		English	Creative writing (EW3)
			My home cleanliness.(Help in cleaning your rooms write three lines about it.)
4	11-06-2026 (Thursday)	EVS	Why cleanliness is important?
			दिए गए शब्दों के 3 - 3 पर्यायवाची शब्द लिखिए और चित्र भी बनाइए :-
		Hindi	घर, पेंड़, बादल, आँख, कमल, माँ, गुरु, किताब, गाय, विद्यालय
5	12-06-2026 (Friday)	Art	Interaction class by Miss Deepa Panchal

DAY 1 – GRAMMAR WORKSHEET

A. NOUNS – Underline the nouns

1. The boy is playing.
2. Riya has a doll.
3. The dog is barking.
4. My mother is cooking.
5. We went to school.

B. PRONOUNS – Fill in the blanks (he, she, it, they, we)

1. Rohan is my brother. ____ is kind.
2. The cat is sleeping. ____ is tired.
3. Meena is my friend. ____ helps me.
4. My friends are here. ____ are happy.
5. My sister and I study together. ____ read daily.

C. VERBS – Circle the action words

1. The baby cries loudly.
2. Birds fly in the sky.
3. She writes neatly.
4. We play cricket.
5. The dog runs fast.

D. ADJECTIVES – Underline the describing words

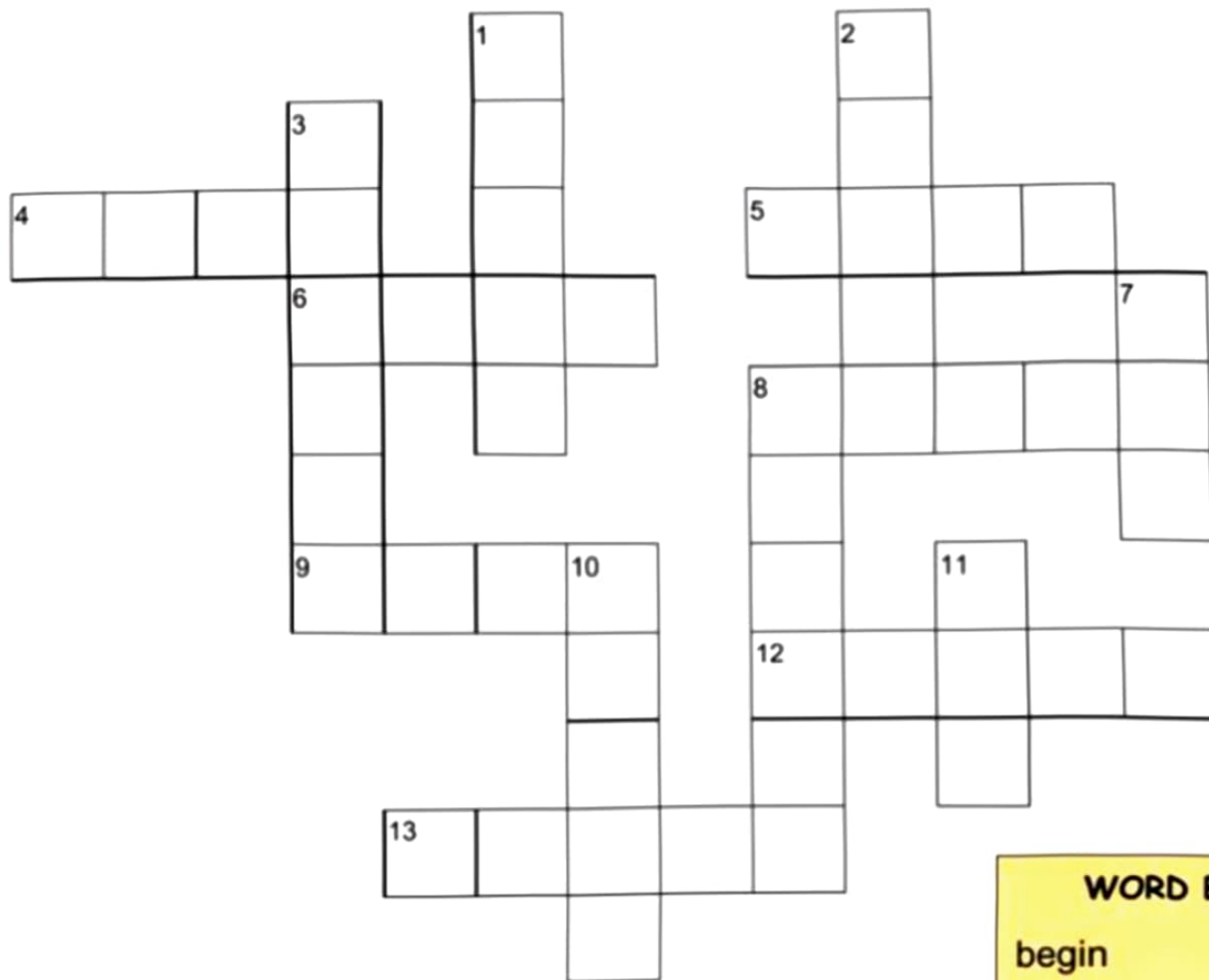
1. I have a red bag.
2. The tall boy is running.
3. She ate a sweet mango.
4. We saw a big elephant.
5. The small cat is sleeping.

E. ARTICLES – Fill in a, an, the

1. ____ apple is red.
2. I saw ____ elephant.
3. ____ sun rises in the east.
4. He bought ____ pen.
5. She is ____ honest girl.

EW2 14/05/26 Synonyms Review

Fill in the puzzle with the words that mean the same thing or almost the same thing.



ACROSS

DOWN

- | | |
|---------------------------|---------------------------------|
| 4 Synonym of Hop | 1 Synonym of Eat |
| 5 Synonym of Hot | 2 Synonym of Go away |
| 6 Synonym of Stone | 3 Synonym of Run |
| 8 Synonym of Start | 7 Synonym of Finish |
| 9 Synonym of Throw | 8 Synonym of Dance |
| 12 Synonym of Big | 10 Synonym of Talk |
| 13 Synonym of Fire | 11 Synonym of Automobile |

WORD BANK

begin	boogie
car	end
flame	giant
jump	leave,
munch	rock
speak	sprint
toss	warm

EW3 26/05/26

Summer Word Scramble

Unscramble the summer words and join them to the pictures on the right. We've done the first one for you!

gnampic

camping

murmes

wingmims

fluttbery

usencrens

snu

chabe

cie macer

mundshrotter

bestewrasir

dans lactes

wolfrunes



Creative Writing

Look at the picture given below and complete the story using the clues.



3. Fill in the blanks:


Word Bank:*

(sand, happy, shells, sunny, blue, bright, umbrellas, again)

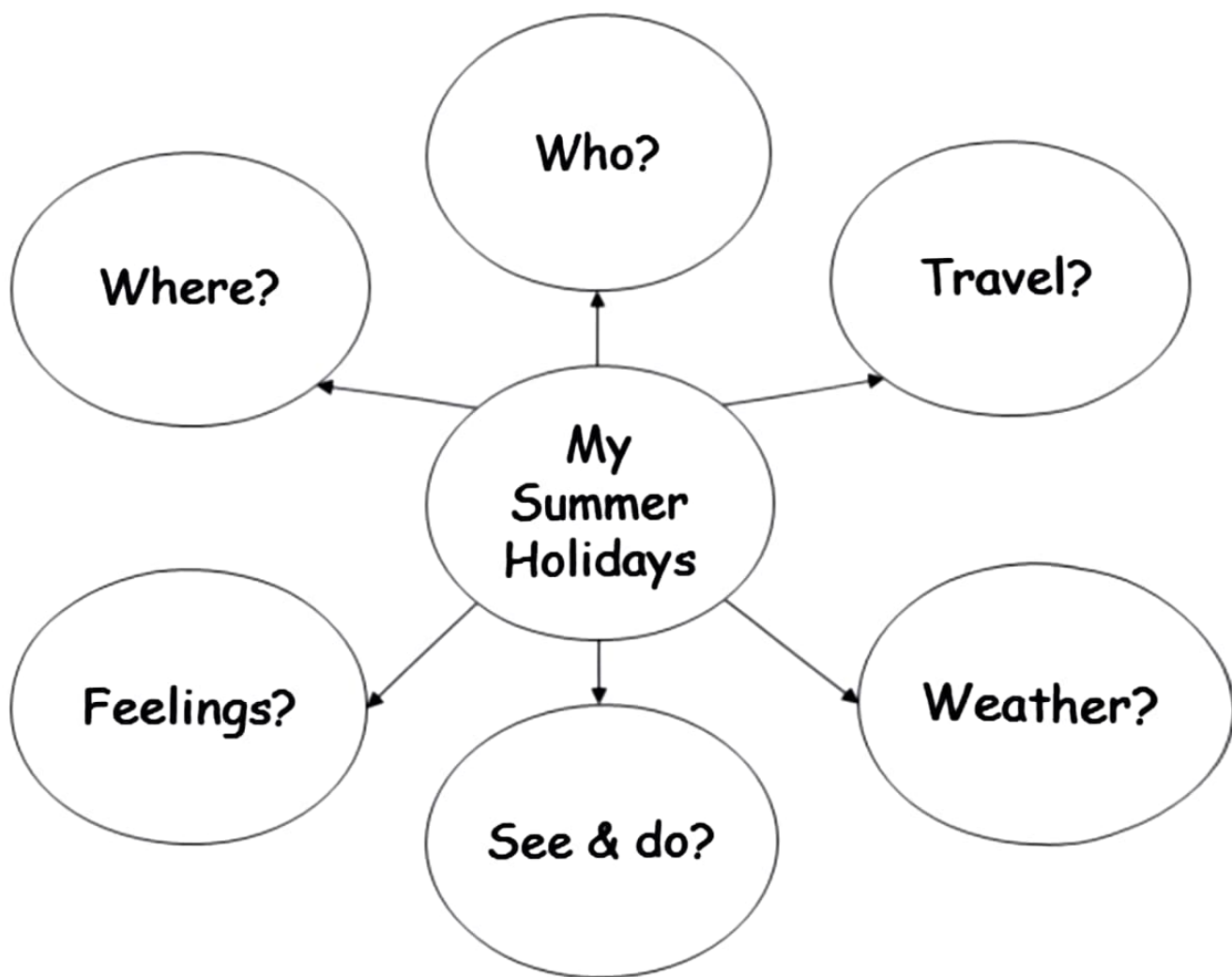
- It is a _____ day at the beach.
- The sun is shining very _____.
- Children are playing on the _____.
- Some are making _____ castles.
- A boy is collecting _____ from the shore.
- The sea water is very _____.
- People are sitting under _____.
- The waves are coming _____ and again.
- Everyone is feeling very _____ and excited

EW3

My Summer Holiday



Write about what you did for your summer holidays last year. Use the map below to help you.



06-05-2026

वचन

इन शब्दों के एकवचन और बहुवचन के सही जोड़े बनाकर लिखे-

किताब, कविता

एकवचन

बहुवचन

साइकिल

कविताएँ

बच्चा थालियों

किताबें बच्चे

दवाई

घोड़ा मटके

दवाईयाँ

मटका

थाली



06-05-2026

वचन

इन शब्दों के एकवचन और बहुवचन के सही जोड़े बनाकर लिखे-

खिलौना तारे	एकवचन	बहुवचन
ऊंगलियाँ	_____	_____
खिलौने	_____	_____
कली	_____	_____
आँख	_____	_____
तारा	_____	_____
ऊंगली	_____	_____
बोतल	_____	_____
कलियाँ	_____	_____
मालाएँ	_____	_____
बोतलें	_____	_____
माला	_____	_____



© copyright. Englishonline.com

06-05-2026

HINDI WORKSHEET



वचन
(Number)



एकवचन (Singular)	बहुवचन (Plural)
बच्चा	बच्चे (आ>ए)
लड़का	
बेटा	
पंखा	
कपड़ा	
पौधा	
तारा	
तोता	
पत्ता	
ताला	
घोड़ा	

• इन संज्ञा शब्दों के अंत में 'आ' मात्रा 'ए' मात्रा में बदल जाएगी।

18-05-2026

दिए गए वाक्यों में रंगीन छपे शब्दों के विलोम शब्द लिखकर वाक्य पुनः लिखिए।

1. डाकघर **बंद** है।

2. चूहा **अंदर** गया।

3. मुझे कुछ **ठंडा** खाना है।

4. वह मेरा **छोटा** भाई है।

5. यह काम **आसान** है।

18-05-2026

प्रश्न 1 - निम्नलिखित शब्दों के विपरीतार्थक शब्द लिखिए

क.) प्रसन्न

अंधकार

ख.) मित्र

अप्रसन्न

ग.) प्रकाश

शत्रु

घ.) अमीर

भारी

ङ.) हल्का

गरीब

च.) अच्छा

गीला

छ.) सूखा

बुरा

ज.) ठंडा

उत्तर

झ.) प्रश्न

गरम

ञ.) अपना

साफ

ट.) गन्दा

पराया

18-05-2026

नीचे दिए गए शब्दों के सही विलोम शब्द कोष्ठक में से चुनकर लिखिए।

दूर, जाना, महंगा, पराया, नकली, गीला

1. सूखा

2. अपना

3. सस्ता

4. असली

5. आना

6. पास















18-05-2026

MW {1A} - 12-05-2026

worksheetspack 3D Shapes Name: _____ Date: _____

Tick the correct option.

1 	<input type="checkbox"/> cone <input type="checkbox"/> sphere <input type="checkbox"/> tetrahedron	2 	<input type="checkbox"/> triangular prism <input type="checkbox"/> hexagonal prism <input type="checkbox"/> pentagonal prism
3 	<input type="checkbox"/> cylinder <input type="checkbox"/> cuboid <input type="checkbox"/> cube	4 	<input type="checkbox"/> tetrahedron <input type="checkbox"/> sphere <input type="checkbox"/> hemisphere
5 	<input type="checkbox"/> cuboid <input type="checkbox"/> octahedron <input type="checkbox"/> hemisphere	6 	<input type="checkbox"/> torus <input type="checkbox"/> cube <input type="checkbox"/> triangular prism
7 	<input type="checkbox"/> sphere <input type="checkbox"/> cylinder <input type="checkbox"/> cone	8 	<input type="checkbox"/> hemisphere <input type="checkbox"/> cone <input type="checkbox"/> sphere
9 	<input type="checkbox"/> tetrahedron <input type="checkbox"/> cuboid <input type="checkbox"/> hexagonal prism	10 	<input type="checkbox"/> cylinder <input type="checkbox"/> torus <input type="checkbox"/> cone
11 	<input type="checkbox"/> pentagonal prism <input type="checkbox"/> triangular prism <input type="checkbox"/> cube	12 	<input type="checkbox"/> cube <input type="checkbox"/> octahedron <input type="checkbox"/> cuboid

www.worksheetspack.com

MW 1(b) (12/05/26)

1) which geometrical instrument is used to draw a line segment?

a) Divider b) Compass c) Ruler d) Set square.

2) A bangle is in the shape of a__

.

3) A full moon has _ edges.

4) what are the smallest even number and the smallest odd number?

5) Complete the pattern:7 ,10 ,13 ,__,_.

6) Reena arranges chair in 6 rows with 7 chairs in each row for a school event.How many chairs has she arranged in total ?a Also ,can she arrange them in equal pairs without any chair left?

7) Find the difference between rupees 614 and rupees 398.

8) The cost of one shirt is Rs.580 and a pair of trousers is Rs.240.What is the total cost of a shirt and trousers?

9) How many RS.10 notes make RS.100.

10) Why is it important to use standard units like kg and L shopping?

{MW A}

Puzzle/Riddle		MW2	19-5-26	Critical Thinking
<p>I have 5 faces and 5 corners, My edges are 8 — no more, no less! 1 face is a square, and the rest are triangles. What 3D shape do you think I am? _____</p>	<p>I have 1 flat face and 1 curved face, And 1 edge that goes all around. I roll and spin but don't have a corner, What shape am I? _____</p>	<p>I am smooth and round with a curved face, No edges or corners you'll find on me! You can roll me far with a little bounce, Who am I? _____</p>		
<p>I have 2 flat faces and 1 curved face, 2 edges hold my sides in place. I have no corners at all to see, What shape could I possibly be? _____</p>	<p>I come with 5 faces and 6 corners too, 9 edges hold my sides for you. 2 triangle faces, the rest are rectangles, Can you guess me? _____</p>	<p>With 6 faces, 12 edges, and 8 corners strong, All of my sides are the same all along. I look like a box, neat and square — Can you name me with care? _____</p>		

{MW B}

1) Fil in the blanks.

a). 1 minutes = _ seconds.

b) 2 minutes = _ × 30 seconds

2). Check whether the following are True or False.

a) $72 \div 8 = 9 \times 1$ __

b) $45 \times 3 = 180 \div 2 =$ __

3) Do the Addition

a) $1230 + 4567$

b) $3567 + 6781$

c). $1245 + 8097$











4) Do the subtraction

a). $450 -- 256$

b) $1000 -- 356$

c). $1563 -- 2789$

EVS WORKSHEET

People at work	Occupation	What they do	Material/Tool
	Mason	Mending walls using bricks and cement.	 Trowel
			 _____
			 _____
			 _____
			 _____

Name : _____ Date : 05/05/26
 Class : _____ Date : (1)

My Little
J&J's classroom

Our Community Helpers

Find and circle the words using color pens.



p	o	s	t	m	a	n	w	z	k
a	b	v	w	a	v	r	d	u	o
r	n	x	e	s	g	q	o	i	p
t	a	i	l	o	r	x	c	l	o
e	q	z	r	n	y	o	t	x	l
a	b	g	h	i	m	a	o	s	i
c	c	o	b	b	l	e	r	a	c
h	d	g	q	u	m	h	f	o	e
e	l	t	f	a	r	m	e	r	p
r	w	b	e	n	r	j	o	h	z



Fill in the blanks with the words what do you found from the puzzle.

- The _____ catches thieves.
- The _____ stitches our clothes.
- The _____ delivers our letters.
- The _____ grows plants in the farm.
- The _____ help us to get well when we are ill.
- The _____ teach us to read and write in the school.
- The _____ mends our shoes.
- The _____ builds our houses.

Name : _____













Class : 05/05/26



(1)

Instruction: Look at the pictures and write the names of the community helpers

Vet	Firefighter	Dentist	Musician
Chef	Astronaut	Engineer	Doctor
Pilot	Police officer	Teacher	Writer

 <input type="text"/>	 <input type="text"/>	 <input type="text"/>
 <input type="text"/>	 <input type="text"/>	 <input type="text"/>
 <input type="text"/>	 <input type="text"/>	 <input type="text"/>
 <input type="text"/>	 <input type="text"/>	 <input type="text"/>

Community helper

05/05/26

(1)

Jobs and their Workplace



Q: What does he do?
A: He is a _____.

Q: Where does a doctor work?
A: A doctor works at the _____.



Q: What does she do?
A: She is a _____.

Q: Where does a teacher work?
A: A teacher works at the _____.



Q: What does he do?
A: He is a _____.

Q: Where does a policeman work?
A: A policeman works at the _____.



Q: What does he do?
A: He is a _____.

Q: Where does a postman work?
A: A postman works at the _____.



Q: What does she do?
A: She is a _____.

Q: Where does a nurse work?
A: A nurse works at the _____.



Q: What does she do?
A: She is a _____.

Q: Where does a vet work?
A: A vet works at the _____.

13/05/26

Case based questions - (2/3)

(1)

Riya sees that the tap in her kitchen is left open and water is flowing continuously. She quickly closes it.

Q1. Why did Riya close the tap?

- a) To make noise
- b) To save water
- c) To play with water
- d) To clean the sink

 Answer:

Q2. What should we do to save water?

- a) Keep taps open
- b) Waste water
- c) Turn off taps after use
- d) Throw water on roads

13/05/26

4. Case Study: Sharing with Friends (2/3)

Aman brought chocolates to school. He shared them with all his friends.

Questions:

1. What value does Aman show?

- a) Sharing
- b) Fighting
- c) Lying
- d) Anger

2. Fill in the blank:

Aman shared chocolates with his _____.

3. Is sharing a good habit? Why?



21/05/26

2. Case Study: Rahul and His Friends

Rahul plays with his friends every evening.

One day, his friend fell down while playing.

Rahul helped him and took him home.

Questions:

1. What did Rahul do when his friend fell?

- a) Laughed
- b) Ignored him
- c) Helped him
- d) Ran away

2. Fill in the blank:

Rahul is a _____ friend.

3. What should you do if your friend is hurt?

21-05-2026



Choose and color



Select and color the correct answer from the options given below.

1. Identify the animal that sleeps throughout the summer. _____
a. Snail b. Deer c. Rabbit d. Frog
2. Pick the parasite that lives on the host's body. _____
a. Cockroach b. Lice c. Tapeworm d. Roundworm
3. _____ can live on both land and water.
a. Fish b. Frog c. Snail d. Octopus
4. Sheep and camel are _____ animals.
a. omnivore b. wild c. herbivore d. aerial
5. Birds are an example of _____ animals.
a. domestic b. amphibians c. aerial d. aquatic
6. the long winter sleep of animals is known as _____
a. moulting b. aestivation c. hooves d. hibernation
7. Whales and turtles have _____ that help them swim.
a. moulting b. wings c. flippers d. fins



COMMUNITY HELPERS

Draw and colour

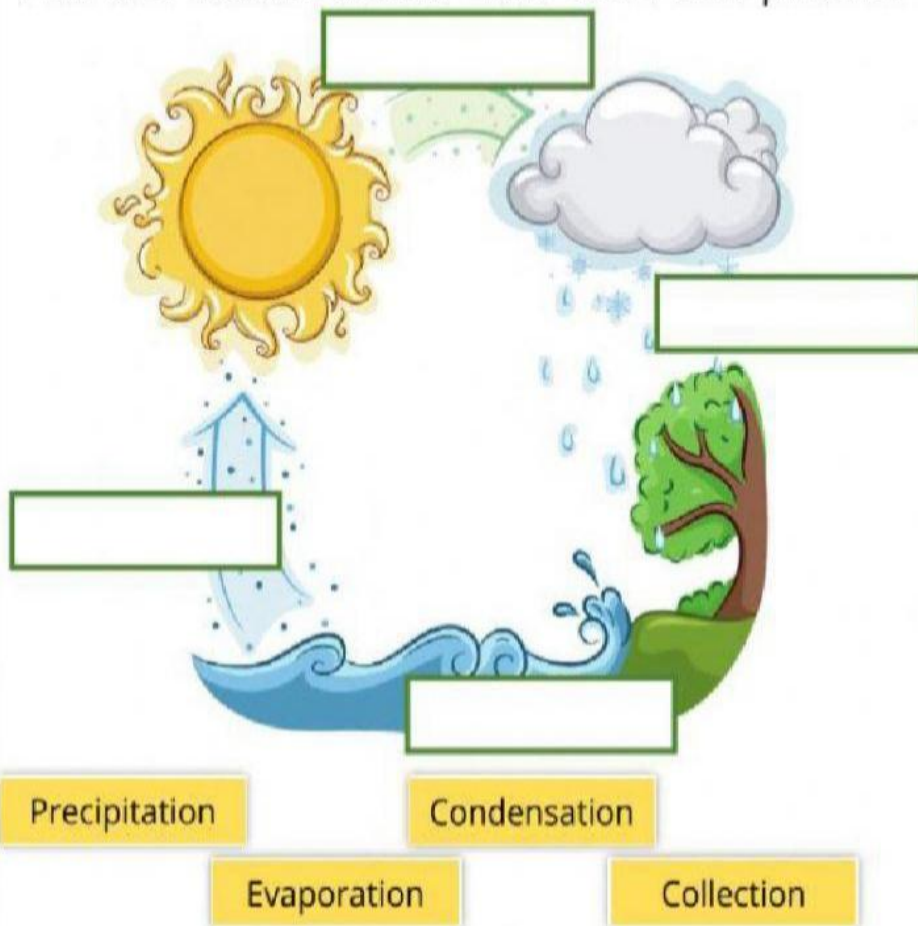
03/06/26



WATER CYCLE

03/06/26

Put the name under the correct place. (4)



Answer the following questions.

The sun heats water and creates vapor.

The water vapor goes up and form clouds.

When the clouds become to heavy and cannot hold more water inside.

Mention three types of precipitation.

1.

2.

3.